

Name: _____

Thursday



Correct these sentences.

1. did allison broke her leg yesterday

2. shelton watched as the zookeeper feeds the animals

Which word is not spelled correctly?

3. odd redy magnet speedy

4. story handle gane fair

Which word does not belong in the group?

5. sandals socks gloves sneakers

Date _____

The Suffixes *-less* and *-ness*

Write the Basic Word that makes sense in the sentence.

1. The hiker thanked the guide for her help and _____

2. In high mountains, a lack of air can cause _____

3. Being _____ in the mountains is dangerous.

4. It is not wise to climb mountains in _____

5. The _____ guide climbed the high cliff.

6. I was amazed at the _____ of the snow.

7. Scientists measured the _____ of the ice at the top.

Challenge: Choose a Challenge Word. Use it in a sentence.

Mountains: Surviving on Mt. Everest

Spelling:
The Suffixes *-less* and *-ness*

Spelling Words

Basic

1. painless
2. sickness
3. sadness
4. helpless
5. thankless
6. kindness
7. hopeless
8. darkness
9. fearless
10. thickness
11. careless
12. goodness
13. spotless
14. softness

Review

useful
weakly

Challenge

breathless
eagerness

USING IRREGULAR COMPARATIVE AND SUPERLATIVE ADJECTIVES

Name _____

For each adjective, write a sentence using the comparative (C) and superlative (S) adjectives. See example:



C: The boys are more daring than the teachers.

S: The girls are the most daring of all.



C: _____

S: _____



C: _____

S: _____




C: _____

S: _____



C: _____

S: _____



C: _____

S: _____

Name _____

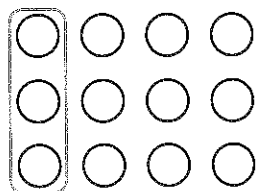
Find Part of a Group Using Unit Fractions



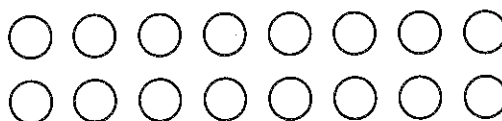
COMMON CORE STANDARD—3.NF.1
Develop understanding of fractions as numbers.

Circle equal groups to solve. Count the number of items in 1 group.


1. $\frac{1}{4}$ of 12 = 3




2. $\frac{1}{8}$ of 16 = _____




3. $\frac{1}{3}$ of 12 = _____



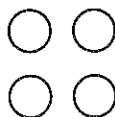
4. $\frac{1}{3}$ of 9 = _____



5. $\frac{1}{6}$ of 18 = _____



6. $\frac{1}{2}$ of 4 = _____



Problem Solving

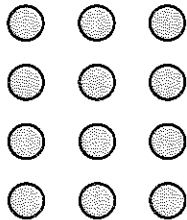


7. Marco drew 24 pictures. He drew $\frac{1}{6}$ of them in art class. How many pictures did Marco draw in art class?

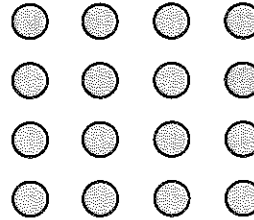
8. Caroline has 16 marbles. One eighth of them are blue. How many of Caroline's marbles are blue?

Lesson Check (3.NF.1)

1. Ms. Davis made 12 blankets for her grandchildren. One third of the blankets are blue. How many blue blankets did she make?



2. Jackson mowed 16 lawns. One fourth of the lawns are on Main Street. How many lawns on Main Street did Jackson mow?



Spiral Review (3.OA.7, 3.NBT.1, 3.NBT.2)

3. Find the difference.

$$\begin{array}{r} 509 \\ -175 \\ \hline \end{array}$$

4. Find the quotient.

$$6 \overline{)54}$$

5. There are 226 pets entered in the pet show. What is 226 rounded to the nearest hundred?

6. Ladonne made 36 muffins. She put the same number of muffins on each of 4 plates. How many muffins did she put on each plate?